



Worksheet 3 · Numbers up to 5

Numbers up to 5 · matheeule.de

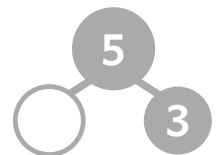
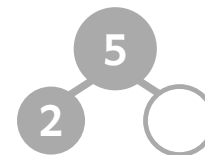
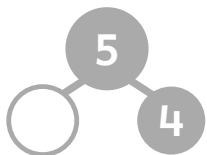
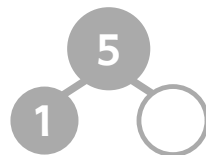
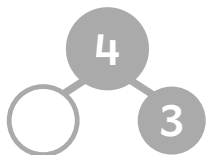
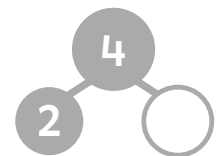
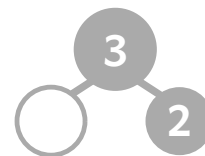
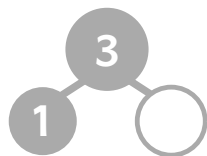
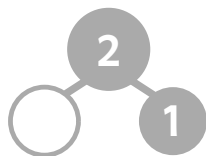
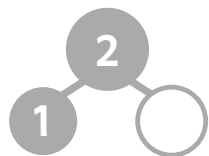
Fill in the missing numbers!

→ matheeule.de/en/help/grade1/number-line



Break the numbers apart!

→ matheeule.de/en/help/grade1/break-apart



Minus - work it out!

→ matheeule.de/en/help/grade1/calculation

$3 - 1 = \square$

$4 - 3 = \square$

$5 - 4 = \square$

$5 - 5 = \square$

$4 - 2 = \square$

$5 - 0 = \square$

$3 - 0 = \square$

$3 - 3 = \square$

$5 - 3 = \square$

$3 - 2 = \square$

$5 - 2 = \square$

$4 - 0 = \square$

$5 - 1 = \square$

$4 - 1 = \square$

$4 - 4 = \square$

$2 - 1 = \square$