

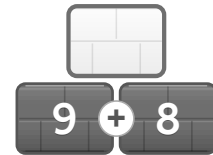
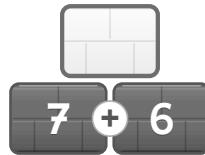
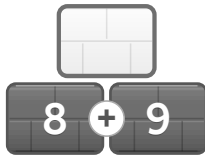
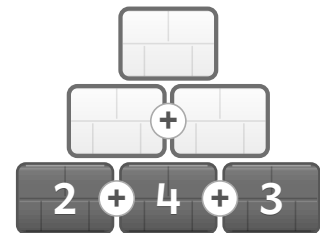
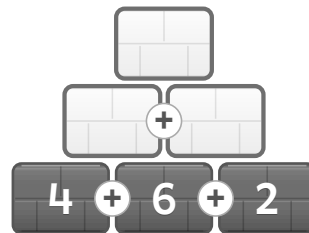
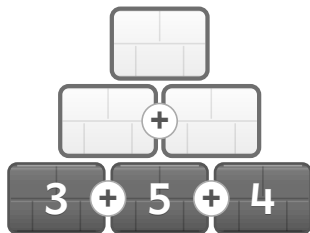
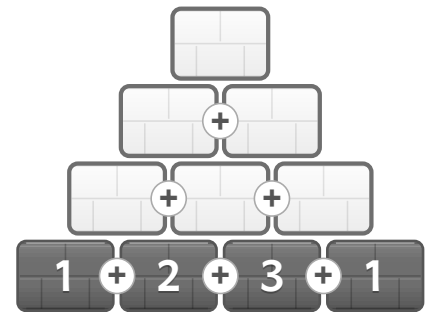
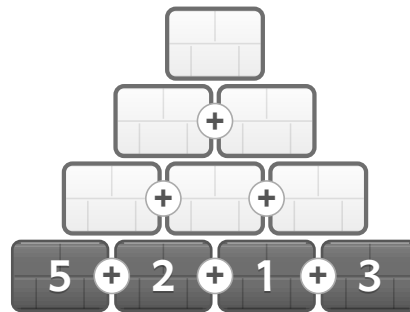
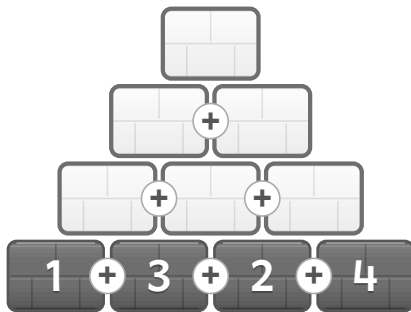


# Hoja de ejercicios 3 · Números hasta 20

Números hasta el 20 · matheeule.de

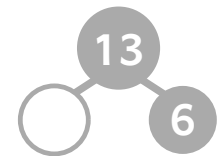
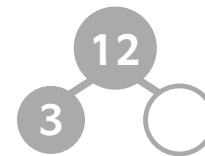
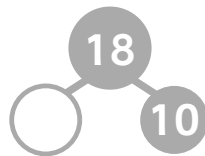
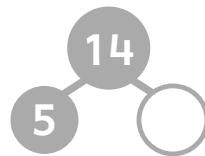
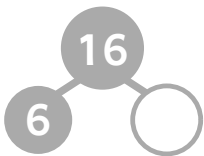
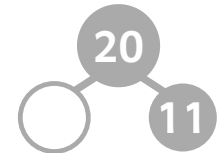
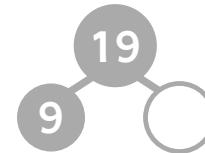
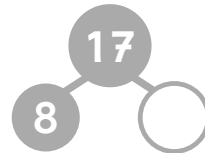
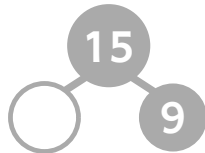
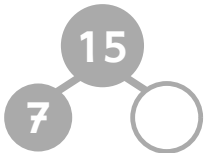
## ¡Construye el muro!

→ [matheeule.de/es/ayuda/primaria1/muro-numerico](https://matheeule.de/es/ayuda/primaria1/muro-numerico)



## Descompón los números

→ [matheeule.de/es/ayuda/primaria1/descomponer](https://matheeule.de/es/ayuda/primaria1/descomponer)



## ¿Cuántas veces cabe el número?

→ [matheeule.de/es/ayuda/primaria1/multiplicar](https://matheeule.de/es/ayuda/primaria1/multiplicar)

$3 + \text{[barra]} = 12 \Rightarrow 3 \text{ cabe } \text{[barra]} \text{ veces en } 12.$

$4 + \text{[barra]} = 16 \Rightarrow 4 \text{ cabe } \text{[barra]} \text{ veces en } 16.$

$2 + \text{[barra]} = 14 \Rightarrow 2 \text{ cabe } \text{[barra]} \text{ veces en } 14.$

$5 + \text{[barra]} = 20 \Rightarrow 5 \text{ cabe } \text{[barra]} \text{ veces en } 20.$