

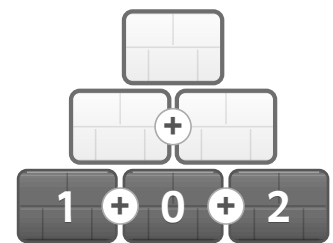
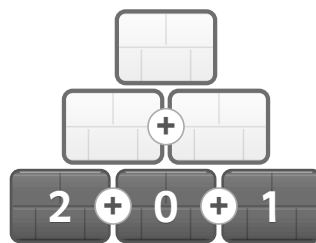
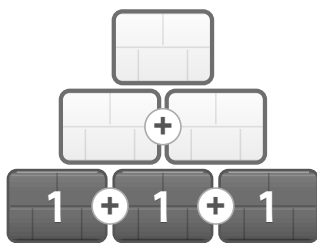
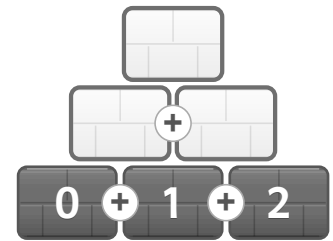
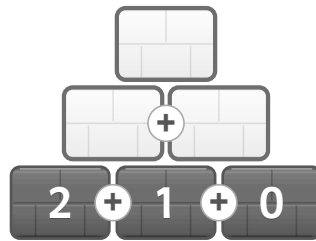
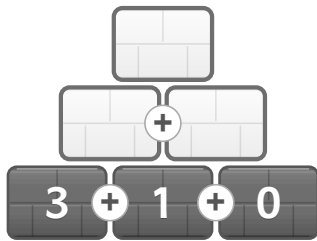
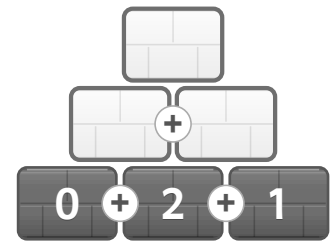
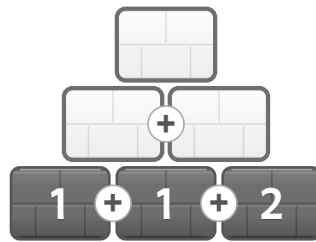
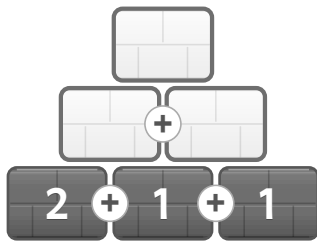


# Übungsblatt 2 · Zahlen bis 5

Zahlen bis 5 · matheeule.de

## Baue die Mauer auf!

→ [matheeule.de/hilfe/klasse1/rechenmauer](https://matheeule.de/hilfe/klasse1/rechenmauer)



## Vergleiche die Zahlen

→ [matheeule.de/hilfe/klasse1/vergleiche](https://matheeule.de/hilfe/klasse1/vergleiche)

- |   |                          |   |   |                          |   |   |                          |   |   |                          |   |   |                          |   |
|---|--------------------------|---|---|--------------------------|---|---|--------------------------|---|---|--------------------------|---|---|--------------------------|---|
| 2 | <input type="checkbox"/> | 4 | 3 | <input type="checkbox"/> | 5 | 1 | <input type="checkbox"/> | 0 | 0 | <input type="checkbox"/> | 5 | 5 | <input type="checkbox"/> | 2 |
| 5 | <input type="checkbox"/> | 3 | 0 | <input type="checkbox"/> | 2 | 4 | <input type="checkbox"/> | 4 | 3 | <input type="checkbox"/> | 3 | 2 | <input type="checkbox"/> | 2 |
| 1 | <input type="checkbox"/> | 1 | 5 | <input type="checkbox"/> | 5 | 2 | <input type="checkbox"/> | 3 | 4 | <input type="checkbox"/> | 0 | 3 | <input type="checkbox"/> | 4 |
| 4 | <input type="checkbox"/> | 2 | 3 | <input type="checkbox"/> | 1 | 5 | <input type="checkbox"/> | 1 | 1 | <input type="checkbox"/> | 2 | 0 | <input type="checkbox"/> | 1 |

## Rechenraupen

→ [matheeule.de/hilfe/klasse1/rechenraupe](https://matheeule.de/hilfe/klasse1/rechenraupe)

